

**Part One:** Checking Solutions – Systems of Equations. For the following systems of equations, determine whether the points given represent solutions.

$$1) \begin{cases} -12x + 9y = 7 \\ 9x - 12y = 6 \end{cases}$$

a)  $(-2, -2)$

yes, it is a solution

no, it is not a solution

$$\underline{-12(-2) + 9(-2) = 7}$$

$$6 = 7 \quad \times$$

$$\underline{9(-2) - 12(-2) = 6}$$

$$6 = 6 \quad \checkmark$$

b)  $(0, 2)$

yes, it is a solution

no, it is not a solution

$$\underline{-12(0) + 9(2) = 7}$$

$$18 = 7 \quad \times$$

$$\underline{9(0) - 12(2) = 6}$$

$$-24 = 6 \quad \times$$

$$2) \begin{cases} y = 2x - 3 \\ y = x - 6 \end{cases}$$

a)  $(-3, -9)$

yes, it is a solution

no, it is not a solution

$$-9 = 2(-3) - 3$$

$$-9 = -9 \quad \checkmark$$

$$-9 = -3 - 6$$

$$-9 = -9 \quad \checkmark$$

b)  $(-9, 3)$

yes, it is a solution

no, it is not a solution

$$3 = 2(-9) - 3$$

$$3 = -21 \quad \times$$

$$3 = -9 - 6$$

$$3 = -15 \quad \times$$

$$3) \begin{cases} 2x - y = 4 \\ 3y = 6x - 12 \end{cases}$$

a)  $(3, 2)$

yes, it is a solution

no, it is not a solution

$$\underline{2(3) - (2) = 4}$$

$$4 = 4 \quad \checkmark$$

$$\underline{3(2) = 6(3) - 12}$$

$$6 = 6 \quad \checkmark$$

b)  $(-3, -10)$

yes, it is a solution

no, it is not a solution

$$\underline{2(-3) - (-10) = 4}$$

$$4 = 4 \quad \checkmark$$

$$\underline{3(-10) = 6(-3) - 12}$$

$$-30 = -30 \quad \checkmark$$

**Part Two:** Determining Number of Solutions. **Without solving** the following systems of equations, determine the number of solutions. Justify your answer.

$$4) \begin{cases} y = \frac{1}{2}x + 3 \\ y = 2x - 4 \end{cases}$$

one solution

(different slopes & different y-int)

$$5) \begin{cases} y = -3x \\ y = -3x + 5 \end{cases}$$

no solution

(same slopes & different y-int)

$$6) \begin{cases} y = -4x - 2 \\ y = \frac{5}{2}x - 2 \end{cases}$$

one solution

(different slopes & same y-int)

$$7) \begin{cases} y = 2x + 5 \\ 2y = 4x + 10 \\ y = 2x + 5 \end{cases}$$

infinitely many solutions

(same slopes & same y-int)

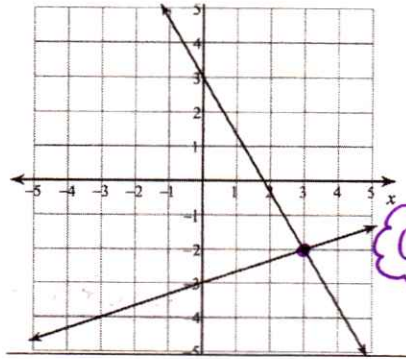
**Part Three: Identifying Solutions.** Identify the solution(s) to the system of equations represented.

8)

x	0	2	4	x	0	2	4
y	-5	-1	3	y	7	5	3

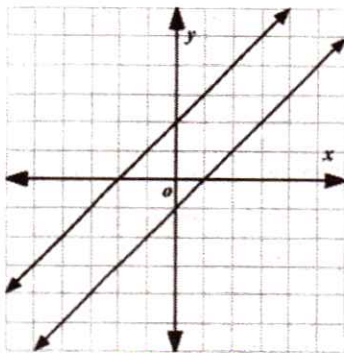
(4, 3)

9)



(3, -2)

10)



No Solution

11)

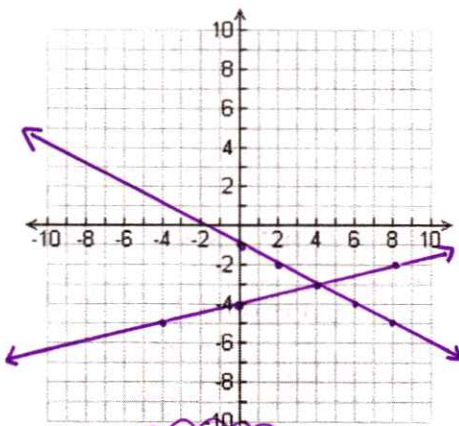
X	F(X)
-1	-5
0	-3
1	-1
2	1
3	3

X	G(X)
1	0.5
2	1
3	1.5
4	2
5	2.5

(2, 1)

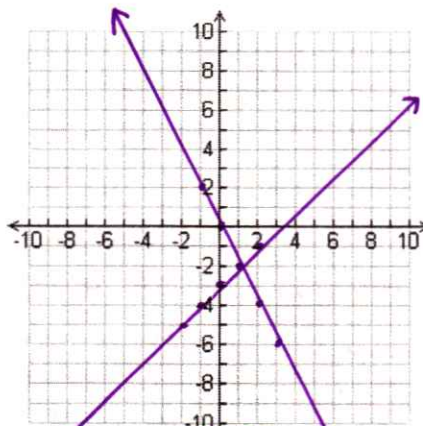
**Part Four: Solving Systems by Graphing.** For the following systems of equations, solve by graphing.

12) 
$$\begin{cases} y = -\frac{1}{2}x - 1 \\ y = \frac{1}{4}x - 4 \end{cases}$$



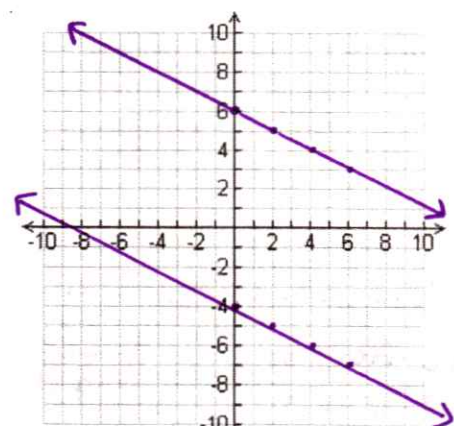
(4, -3)

13) 
$$\begin{cases} y = x - 3 \\ y = -2x \end{cases}$$



(1, -2)

14) 
$$\begin{cases} y = -\frac{1}{2}x - 4 \\ y = -\frac{1}{2}x + 6 \end{cases}$$



No Solution

**Part Five:** Solving Systems by Substitution. For the following systems of equations, solve by substitution.

$$15) \begin{cases} 3y - 6x = 24 \\ y = 2x + 8 \end{cases}$$

$$3(2x + 8) - 6x = 24$$

$$6x + 24 - 6x = 24$$

$$24 = 24$$

True ↓

Infinitely Many Sol.

$$16) \begin{cases} 2x + 3y = 12 \\ y = -x + 5 \end{cases}$$

$$2x + 3(-x + 5) = 12$$

$$2x - 3x + 15 = 12$$

$$-x + 15 = 12$$

$$\frac{-x}{-1} + \frac{15}{-1} = \frac{12}{-1}$$

$$-x = -3$$

$$\frac{-x}{-1} = \frac{-3}{-1}$$

$$x = 3$$

(3, 2)

$$2(3) + 3y = 12$$

$$6 + 3y = 12$$

$$\frac{-6}{-6} + \frac{3y}{-6} = \frac{12}{-6}$$

$$\frac{3y}{3} = \frac{6}{3}$$

$$y = 2$$

$$17) \begin{cases} y = 3x - 2 \\ 6x - 2y = -8 \end{cases}$$

$$6x - 2(3x - 2) = -8$$

$$6x - 6x + 4 = -8$$

$$4 = -8$$

False ↓

No Solution

$$18) \begin{cases} y = 3x \\ y = 5x - 8 \end{cases}$$

$$3x = 5x - 8$$

$$\frac{-3x}{-2} = \frac{5x - 8}{-2}$$

$$-2x = -8$$

$$\frac{-2x}{-2} = \frac{-8}{-2}$$

$$x = 4$$

$$y = 3(4)$$

$$y = 12$$

(4, 12)

**Part Six:** Solving Systems by Elimination. For the following systems of equations, solve by elimination.

$$19) \begin{cases} -4x - 2y = -12 \\ 4x + 8y = -24 \end{cases}$$

$$\begin{array}{r} -4x - 2y = -12 \\ + 4x + 8y = -24 \\ \hline \end{array}$$

$$\frac{6y}{6} = \frac{-36}{6}$$

$$y = -6$$

$$-4x - 2(-6) = -12$$

$$-4x + 12 = -12$$

$$\frac{-4x}{-4} = \frac{-24}{-4}$$

$$x = 6$$

(6, -6)

$$20) \begin{cases} (-5x + 2y = 32) \cdot 2 \\ (2x + 3y = 10) \cdot 5 \end{cases}$$

$$-10x + 4y = 64$$

$$10x + 15y = 50$$

$$\frac{19y}{19} = \frac{114}{19}$$

$$y = 6$$

(-4, 6)

$$2x + 3(6) = 10$$

$$2x + 18 = 10$$

$$\frac{-18}{-18} + \frac{2x}{-18} = \frac{10}{-18}$$

$$\frac{2x}{2} = \frac{-8}{2}$$

$$x = -4$$

$$21) \begin{cases} 2x - 6y = 5 \\ 3x - 9y = 2 \end{cases} \cdot -3$$

$$\begin{array}{r} -6x + 18y = -15 \\ 3x - 9y = 2 \\ \hline 0 = -11 \end{array}$$

False  $\downarrow$

No solution

$$22) \begin{cases} 3x - y = -2 \\ 9x - 3y = -6 \end{cases} \cdot -3$$

$$\begin{array}{r} -9x + 3y = 6 \\ 9x - 3y = -6 \\ \hline 0 = 0 \end{array}$$

True  $\downarrow$

Infinitely Many Solutions

**Part Seven:** Solving Systems – Word Problems. For the following scenarios, create and solve a system of equations to represent the given information. Be sure to define your variables and include units in your final answer.

23) Your upcoming Biology test is made up of two types of questions – questions worth five points each and questions worth 8 points each. There is a total of 22 questions on the test and totals 122 points. How many five point and eight point questions are there?

x: # of 5 point ?s

y: # of 8 point ?s

$$x + y = 22$$

$$5x + 8y = 122$$

$$(x + y = 22) \cdot -5$$

$$5x + 8y = 122$$

$$-5x - 5y = -110$$

$$5x + 8y = 122$$

$$\frac{3y}{3} = \frac{12}{3} \quad y = 4$$

There are 18 five point questions and 4 eight point questions.

$$x + y = 22$$

$$x + y = 22$$

$$\begin{array}{r} -4 \quad -4 \\ \hline \end{array}$$

$$x = 18$$

24) A movie theater sells tickets for \$8 each, with senior citizens able to purchase \$6 tickets. One evening, they sold 525 tickets and took in \$3580 in revenue. How many of each type of tickets were sold?

t: # of regular tickets

s: # of senior citizen tickets

$$t + s = 525$$

$$8t + 6s = 3580$$

$$(t + s = 525) \cdot -8$$

$$8t + 6s = 3580$$

$$-8t - 8s = -4200$$

$$+ 8t + 6s = 3580$$

$$\begin{array}{r} -2s = -620 \\ \hline -2 \quad -2 \end{array}$$

$$s = 310$$

$$t + 310 = 525$$

$$\begin{array}{r} -310 \quad -310 \\ \hline \end{array}$$

$$t = 215$$

215 regular tickets and 310 senior citizen tickets were sold.

25) At a local gym you want to go, you can either pay \$90 for a monthly pass and then pay \$4 each time you go to the gym. Alternatively, you can pay \$13 each time you go to the gym with no monthly pass. After how many visits will your cost be the same? What will the cost be?

y: total cost  
x: # of visits

$$y = 4x + 90$$

$$y = 13x$$

$$\begin{array}{r} 13x = 4x + 90 \\ -4x \quad -4x \\ \hline 9x = 90 \end{array}$$

$$\frac{9x}{9} = \frac{90}{9} \quad x = 10$$

$$y = 4(10) + 90$$

$$y = 130$$

At 10 visits, both options will cost \$130.

**Part Eight:** Choosing the Best Method. For each system of equations below, determine whether graphing, substitution, or elimination would be the best choice. Justify your answer. **You do not need to solve these systems.**

26)  $\begin{cases} y = 7x + 2 \\ 3x - 8y = -1 \end{cases}$

substitution

- 1 in standard form
- 1 in slope-int form

27)  $\begin{cases} -6x + 2y = 12 \\ 4x - 8y = -2 \end{cases}$

elimination

- both equations in standard form

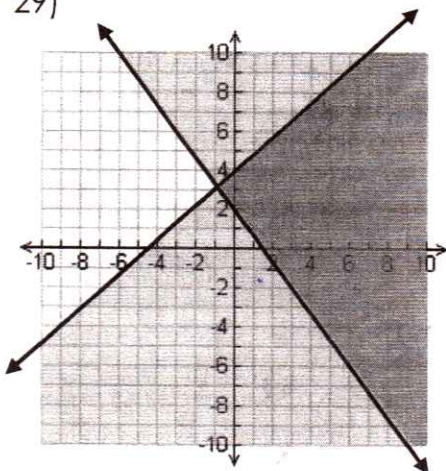
28)  $\begin{cases} y = -\frac{3}{4}x + 2 \\ y = \frac{1}{2}x - 6 \end{cases}$

graphing

- both equations in slope-int form

**Part Nine:** Checking Solutions – Systems of Inequalities. For the following systems of inequalities, determine whether the points given represent solutions. Then name two solutions that aren't listed.

29)

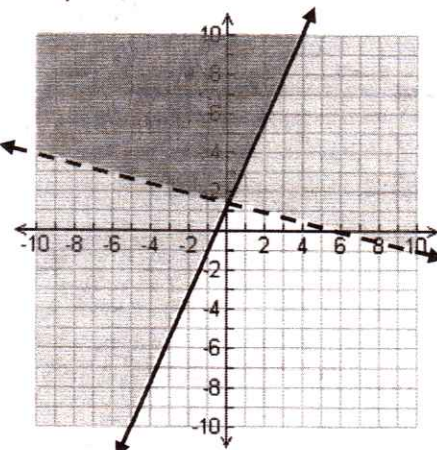


(0, 0)     (2, 0)

(0, 6)     (-6, 2)

Other solutions: (8, 0)  
\*answers will vary (5, 3)

30)

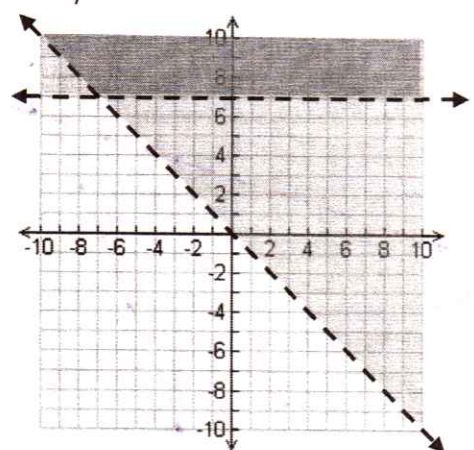


(-2, 2)     (3, 8)

(6, -4)     (-4, 6)

Other solutions: (-4, 4)  
\*answers will vary (-10, 8)

31)



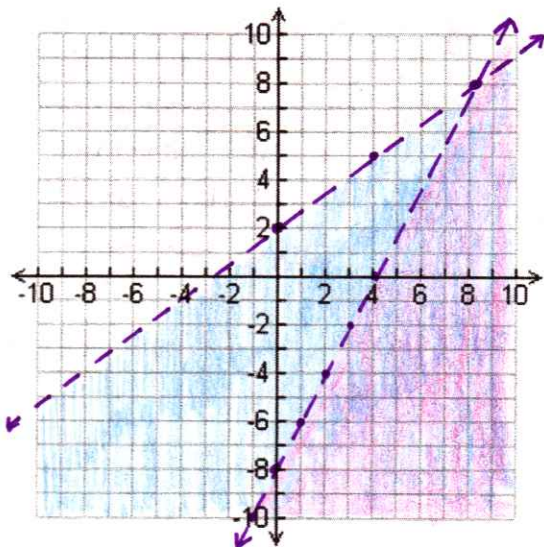
(2, 7)     (-9, 9)

(-4, 6)     (10, 0)

Other solutions: (0, 9)  
\*answers will vary (5, 10)

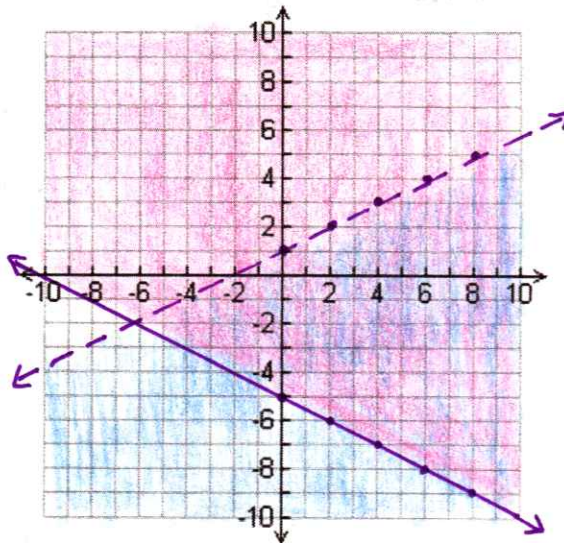
**Part Ten:** Graphing Systems of Inequalities. For each of the systems on inequalities below, graph the system and then name one solution.

$$32) \begin{cases} y < 2x - 8 \\ y < \frac{3}{4}x + 2 \end{cases}$$



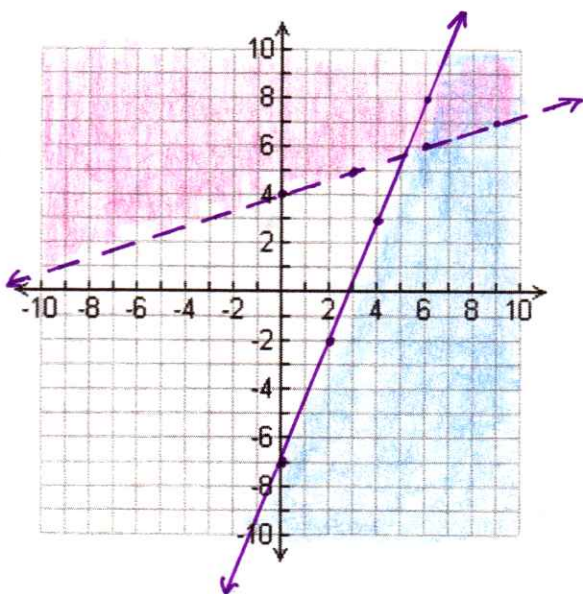
Solution: (8, 2) \*answers will vary\*

$$33) \begin{cases} y \geq -\frac{1}{2}x - 5 \\ y < \frac{1}{2}x + 1 \end{cases}$$



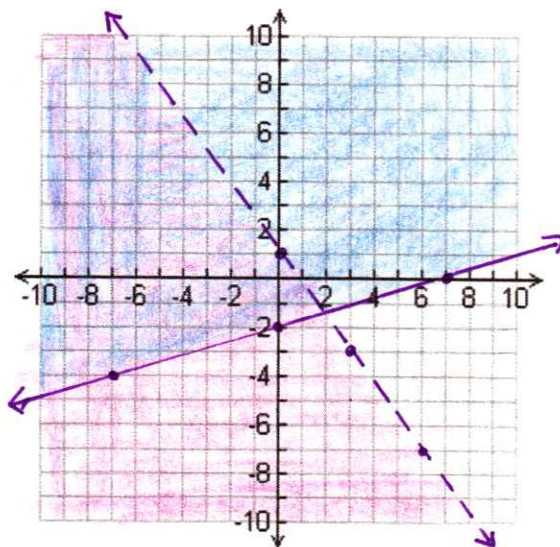
Solution: (0, 0) \*answers will vary\*

$$34) \begin{cases} y > \frac{1}{3}x + 4 \\ y \leq \frac{5}{2}x - 7 \end{cases}$$



Solution: (7, 8) \*answers will vary\*

$$35) \begin{cases} y < -\frac{4}{3}x + 1 \\ y \geq \frac{2}{7}x - 2 \end{cases}$$



Solution: (-5, 3) \*answers will vary\*